



المركز الوطني للقياس
National Center for Assessment

نماذج اختبارات تجريبية

المستوى الأول

باللغة الإنجليزية



(Level 1)

First: Verbal Reasoning and Reading Comprehension

1. Choose the pair of words that shows the same relationship as that of the pair of words in **BOLD**.

FRAME : PICTURE

- A fence : house
- B book: shelf
- C ear : hearing
- D paints : drawing

2. Fill in the space with a word that completes the sequence showing the same relationship as in the words above the line.

ELECTRICITY - BULB - LIGHT
FUEL - CAR -

- A wheels
- B engine
- C pressure
- D movement

3. Yasir is older than Malik whose age falls between Ahmad's and Ziyad's. Which one of them occupies the third position from top?

- A Yasir
- B Malik
- C Ahmad
- D Ziyad

4. My mother had a bad headache. She went to the hospital and her doctor gave her some drugs and advised her to eat boiled "Tikol". This means that "Tikol" is used for:

- A cooking
- B medication
- C prevention
- D purification

5. We decorate our homes with televisions to watch movies. We conclude from this statement that a television is used for:

- A entertainment
- B decoration
- C playing
- D learning

Second: Mathematical and Spatial Reasoning

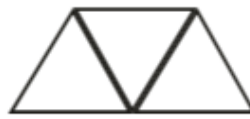
1. We can use wooden sticks to form triangles. How many of them do we need to form 15 equilateral triangles arranged in one row?



3 sticks



5 sticks



7 sticks


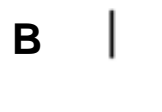
?

.....


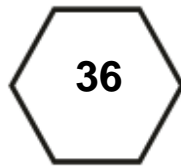
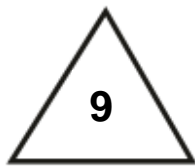
- A 28
B 29
C 30
D 31
2. In a skyscraper, Mansour went up 8 floors from his office and then came down 10 floors. Again, he went up double the floor in which he was to find himself in the 44th floor. In what floor is Mansour's office?

- A 22
B 24
C 26
D 28

3. Which choice completes the following pattern?



4. What number should replace the question mark in the following?



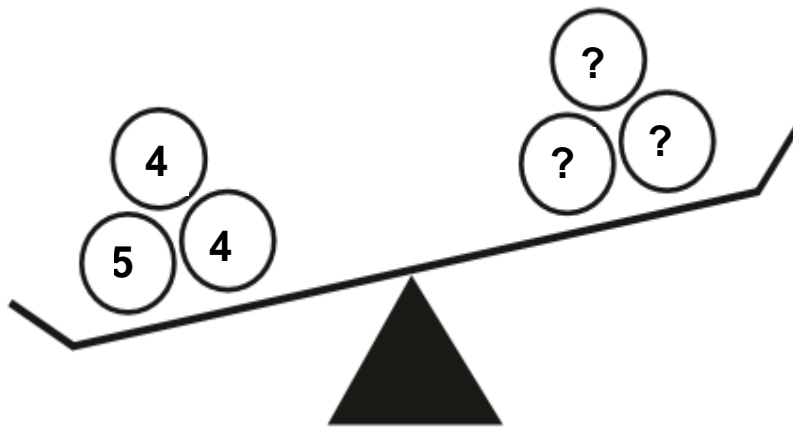
A 7

B 49

C 64

D 81

5. What number should one put in place of the question marks so that the scale remains unbalanced as shown in the following figure?



- A 4
- B 5
- C 6
- D 7

Third: Science and Mechanical Reasoning

1. We often use models in learning, so which shape below can we say that it is a model?



(1)



(2)



(3)



(4)

- A 1
- B 2
- C 3
- D 4

2. Arrange in appropriate order the life cycle of this butterfly.



(1)



(2)



(3)



(4)



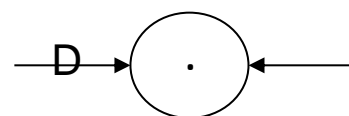
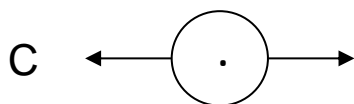
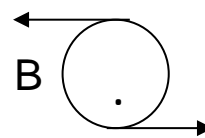
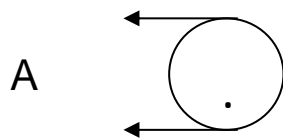
(5)

- A 2,3,5,1,4
- B 5,4,3,1,2
- C 3,1,4,5,2
- D 3,2,4,1,5

3. Why do we see water droplets on the wall of a glass container having cold water? This process is a result of:

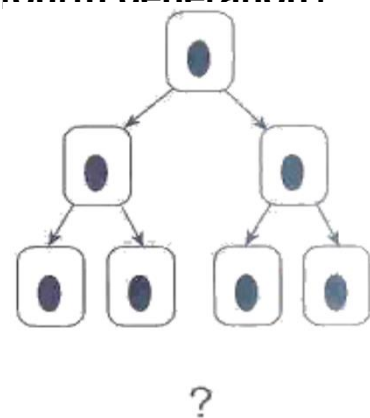
- A evaporation
- B freezing
- C melting
- D condensation

4. We have a free rotating wheel with a centered axis. If 2 equal forces affect the wheel at the same time, which of the following represents the movement of the wheel?



5. The following diagram represents 3 generations of cell division. How many cells should be in the fourth generation?

- A 4
- B 8
- C 16
- D 32



Fourth: Mental Flexibility

1. The following question has an unrealistic introduction. Select the appropriate word that goes along with this introduction.

Fire is cold.

Summer is hot.

So, fire is

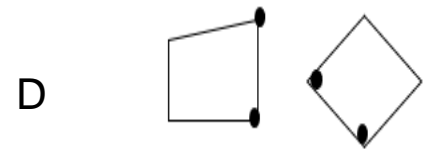
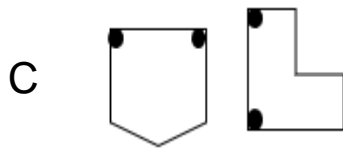
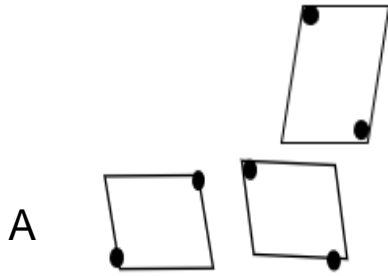
- A bright
- B warm
- C deadly
- D freezing

2. The following question has one word followed by four pairs of words. Choose the pair that relates to this word.

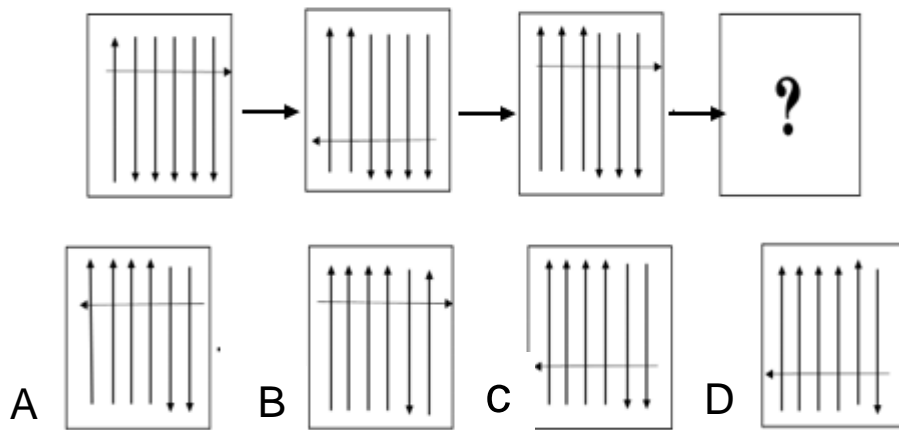
LION

- | | | | |
|---|----------------|---|-------------------|
| A | Bull - Donkey | B | Rabbit - Squirrel |
| C | Wolf - Leopard | D | Goat – Deer |

3. The question has one shape followed by four pairs of shapes.
Select the pair of shapes that relates to that shape.



4. Which shape should replace the question mark in following pattern?



5. Khalid attends football matches with his colleagues instead of staying at his home. Therefore, Khalid:

- A likes watching football matches
- B prefers social gathering
- C enjoys playing football
- D makes sure to visit his colleagues



المركز الوطني للقياس
National Center for Assessment



